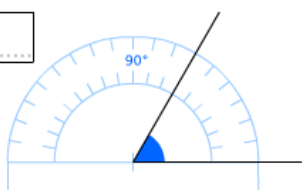


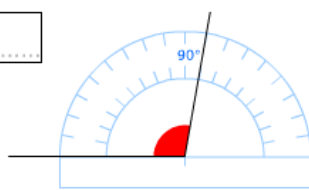
Exercice 17 : lire la mesure de chaque angle sur le rapporteur

Lis la mesure de chaque angle sur le rapporteur gradué tous les 10° .

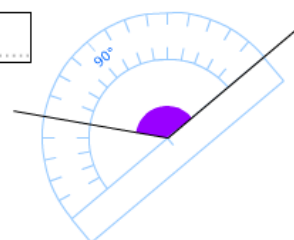
a.



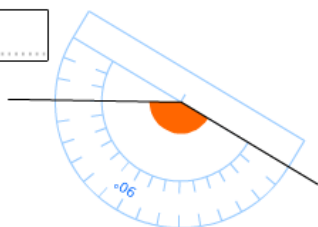
b.



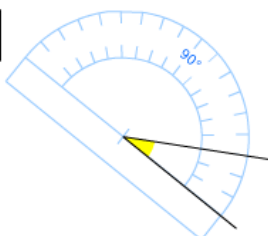
c.



d.



e.



f.

