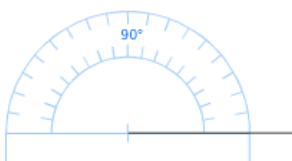


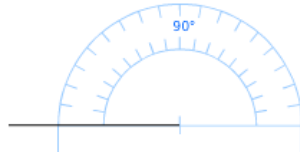
Exercice 20 : construire le deuxième côté d'un angle

Construis le deuxième côté de l'angle pour qu'il ait la mesure indiquée.

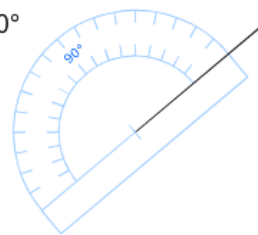
a. 70°



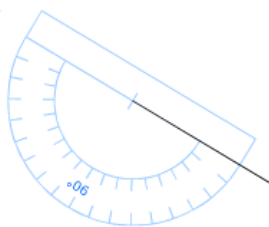
b. 110°



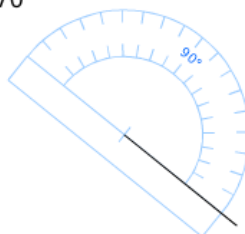
c. 20°



d. 140°



e. 170°



f. 50°

