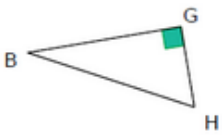
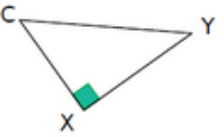
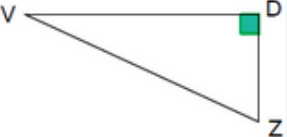
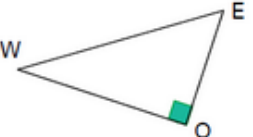


Le théorème de Pythagore

Exercice 44 : triangles et égalité de Pythagore

Écris l'égalité de Pythagore pour chacun des triangles rectangles suivants.

			
$BH^2 = \dots\dots\dots$			