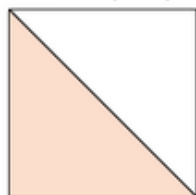



Exercice 5 : fractions et parties coloriées

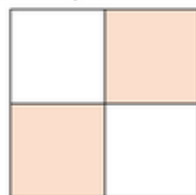
Indique quelle fraction de chaque carré représente la partie colorée.



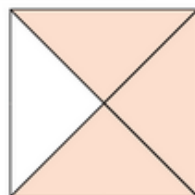
a. ....



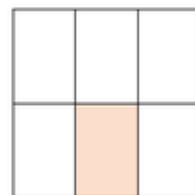
b. ....



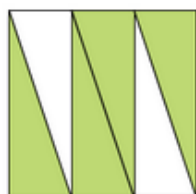
c. ....



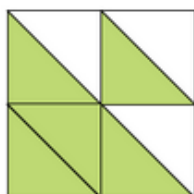
d. ....



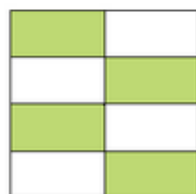
e. ....



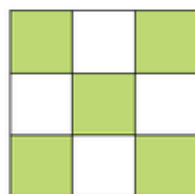
f. ....



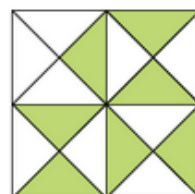
g. ....



h. ....



i. ....



j. ....