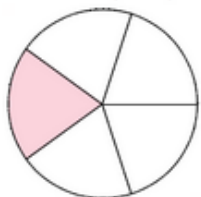
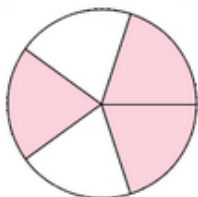


Exercice 6 : disque et partie coloriée

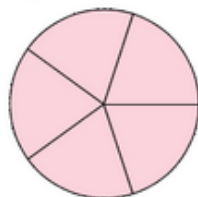
Indique quelle fraction de chaque disque représente la partie coloriée.



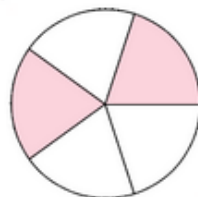
a.



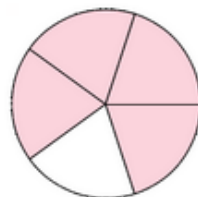
b.



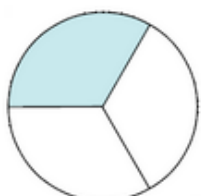
c.



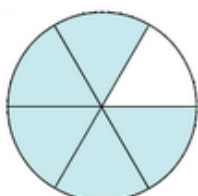
d.



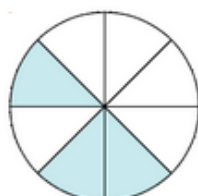
e.



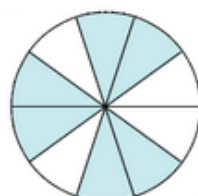
f.



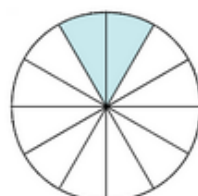
g.



h.



i.



j.