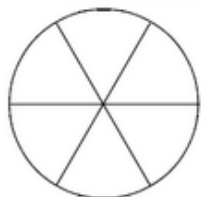


Exercice 9 : colorier une fraction du disque

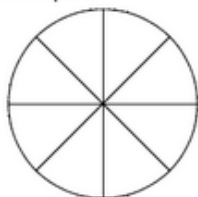
Colorie la fraction du disque qui est indiquée.



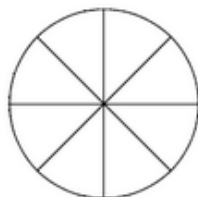
a. $\frac{2}{6}$



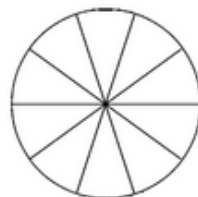
b. $\frac{4}{6}$



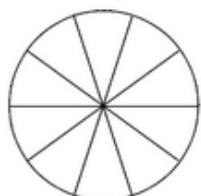
c. $\frac{2}{8}$



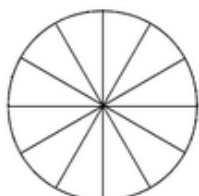
d. $\frac{7}{8}$



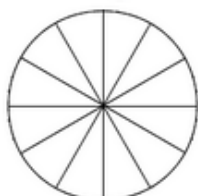
e. $\frac{4}{10}$



f. $\frac{10}{10}$



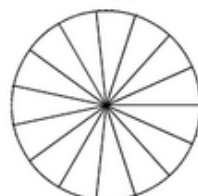
g. $\frac{8}{12}$



h. $\frac{3}{12}$



i. $\frac{1}{15}$



j. $\frac{9}{15}$