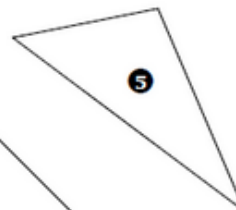
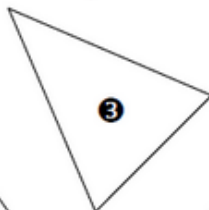
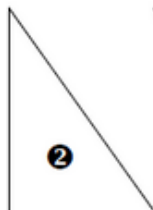
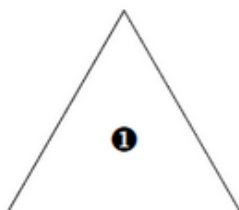


Exercice 6 : triangles particuliers

Complète le tableau ci-dessous en cochant quand c'est vrai.



Triangle	1 angle droit	2 côtés égaux	3 côtés égaux	Triangle rectangle
①				
②				
③				
④				
⑤				