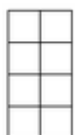
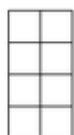


Exercice 2 : colorier la fraction du rectangle et du disque


Colorie la fraction du rectangle qui est indiquée.



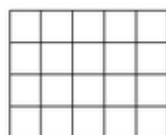
a. $\frac{3}{8}$



b. $\frac{8}{8}$



c. $\frac{7}{20}$



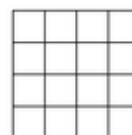
d. $\frac{18}{20}$



e. $\frac{1}{12}$

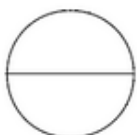


f. $\frac{9}{12}$



g. $\frac{8}{16}$

Colorie la fraction du disque qui est indiquée.



a. $\frac{2}{2}$



b. $\frac{3}{5}$



c. $\frac{5}{12}$



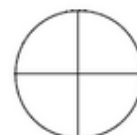
d. $\frac{7}{8}$



e. $\frac{6}{10}$



f. $\frac{4}{6}$



g. $\frac{3}{4}$