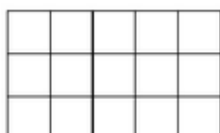



Exercice 3 : colorier la fraction de chaque figure

Colorie la fraction de chaque figure qui est indiquée.



a. $\frac{3}{15}$



b. $\frac{13}{18}$




c. $\frac{1}{3}$




d. $\frac{7}{14}$

Partage chaque figure en cinq parties égales puis colorie les deux cinquièmes.


a.



b.



c.



d.

