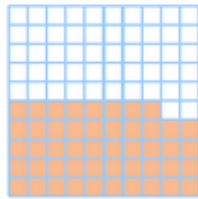


Exercice 1 : indiquer la fraction de chaque figure

Indique quelle fraction de chaque figure représente la partie colorée puis complète.



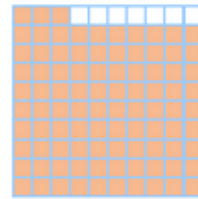
a.



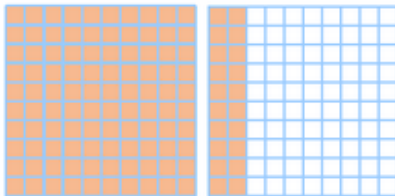
b. = $\frac{\dots}{10} + \frac{\dots}{100}$




c. = $1 + \frac{\dots}{10}$



d. = $\frac{\dots}{10} + \frac{\dots}{100}$



e. = $\frac{\dots}{10} = \dots + \frac{\dots}{10}$



f. = + $\frac{\dots}{100} = \dots + \frac{\dots}{10} + \frac{\dots}{100}$