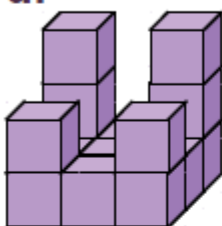


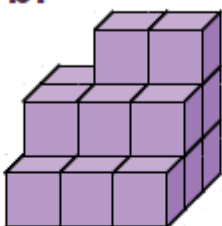
Exercice 19 : donner le volume de chaque solide

Donne le volume de chaque solide exprimé en unités de volume (u.v.).

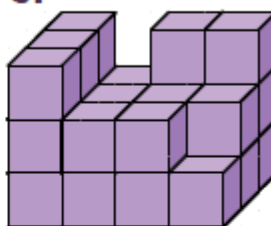
a.



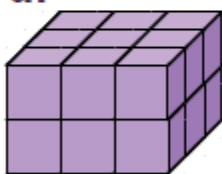
b.



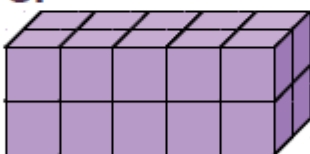
c.



d.



e.



1 u.v.



a.

b.

c.

d.

e.

Volume en u.v.					
----------------	--	--	--	--	--