

Exercice 2 : périmètre de triangles

Détermine le périmètre de chaque triangle en centimètres.

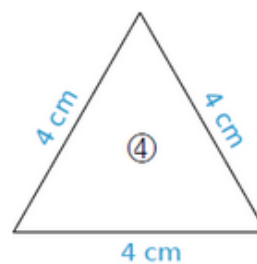
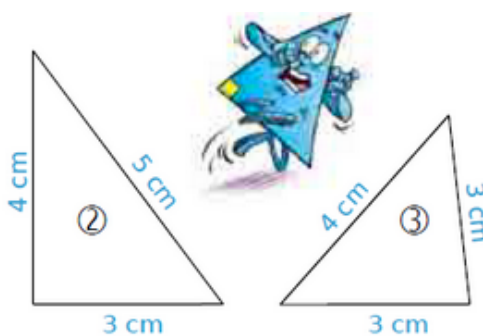
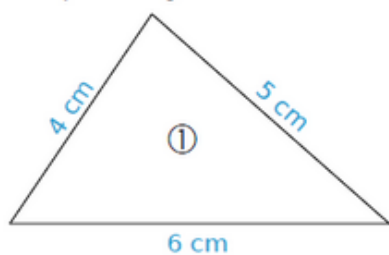


Figure	①	②	③	④
Périmètre				