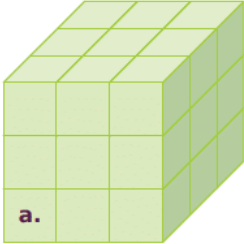
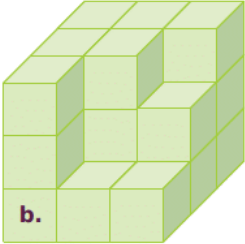


Exercice 33 : des cubes empilés et calculs de volumes

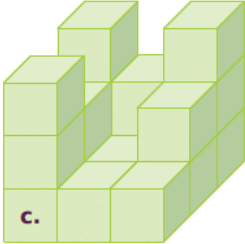
Un petit cube a pour volume 1 cm^3 . Complète le tableau, sachant que le dernier solide (d.) est percé de part en part, au centre de chaque face.



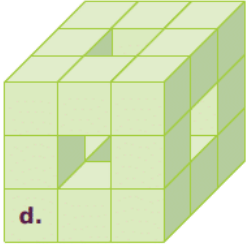
a.



b.



c.



d.

Solide	a.	b.	c.	d.
Nombre de petits cubes manquant pour former le grand cube	0			
Volume en cm^3				