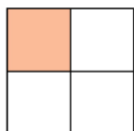
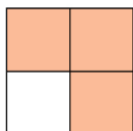


Exercice 30 : fractions et parties coloriées

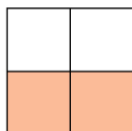
Indique quelle fraction de chaque figure représente la partie coloriée.



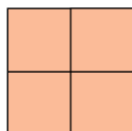
a. ....



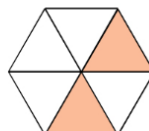
b. ....



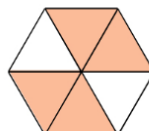
c. ....



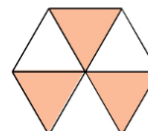
d. ....



e. ....



f. ....



g. ....