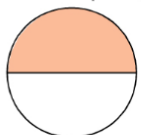
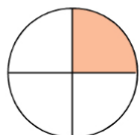


Exercice 31 : fraction d'un disque

Indique quelle fraction de chaque disque représente la partie colorée.



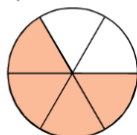
a.



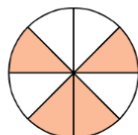
b.



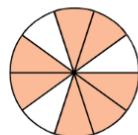
c.



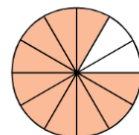
d.



e.



f.



g.