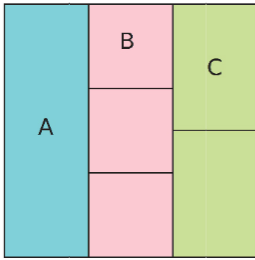


Exercice 34 : donner la fraction de l'aire

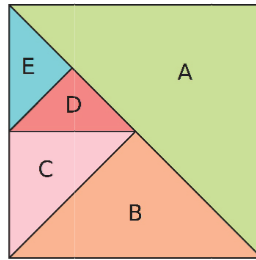
Pour chaque figure, écris la fraction de l'aire du grand carré que représente chaque morceau.

a.



A = B = C =

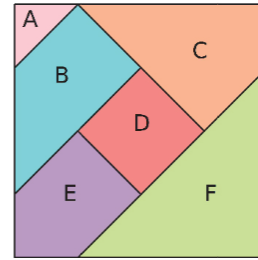
b.



A = B = C =

D = E =

c.



A = B = C =

D = E = F =