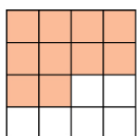
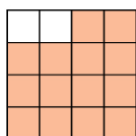


Exercice 32 : fractions d'un carré

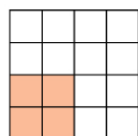
Indique quelle fraction de chaque carré représente la partie colorée.



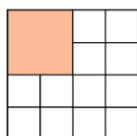
a.



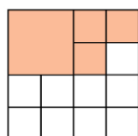
b.



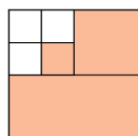
c.



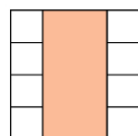
d.



e.



f.



g.